





SKILL 1: Reading and Writing Decimals

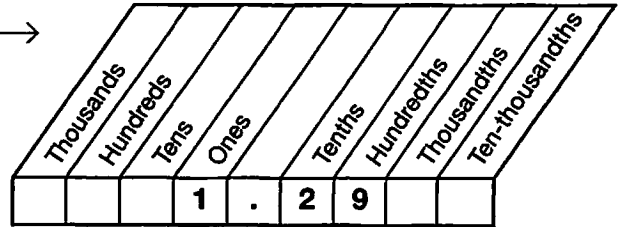
Each grid is separated into 100 sections of the same size, so each section represents one hundredth. The decimal shown is also written in a place-value chart, in number form, and in word form.



Place-value chart: \longrightarrow

Number form: **1.29**

Word form: **one and twenty-nine hundredths**

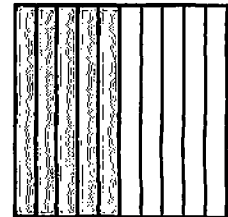


Example 1

Write the decimal shown at the right in number form and in word form.

The grid is divided into 10 sections of the same size, so each section represents one tenth. Five sections are shaded.

Number form: 0.5 Word form: five tenths





Example 2

Write *four and three hundred eleven thousandths* as a decimal.

The decimal point is read "and." A decimal in thousandths has three digits after the decimal point, so the decimal is 4.311.

Guided Practice

Write the decimal shown in number form and then in word form.



Write each number as a decimal.

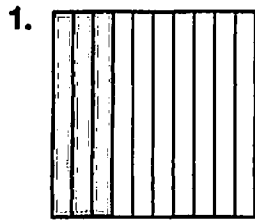
3. eight hundredths _____

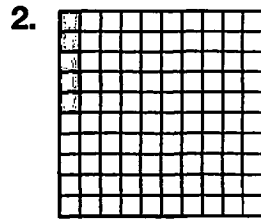
4. eight tenths _____


5. three and four hundred ninety-seven thousandths _____


SKILL 1: Practice

Write each decimal shown in number form and in word form.









Write each number as a decimal.

4. six hundredths _____

5. six tenths _____

6. six thousandths _____

7. fifteen ten-thousandths _____

8. fifty and four tenths _____

9. four and six hundredths _____

10. one hundred eight and ninety-five hundredths _____

11. two thousand four hundred seventy-five and one tenth _____

12. nine and four thousand one hundred twelve ten-thousandths _____

13. ninety-one and three hundred seven thousandths _____

14. nine hundred sixty-eight thousandths _____

Find each answer.

15. How many tenths are in 1 one? _____

16. How many hundredths are in 1 tenth? _____




17. Which decimal is shown below?
Skill 1

A 5.7

C 0.57

B 0.057

D 5700



18. Which decimal is read three and five hundredths?
Skill 1

F 0.35

H 3.005

G 3.05

J 3.50