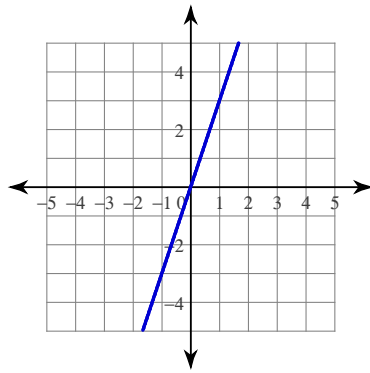


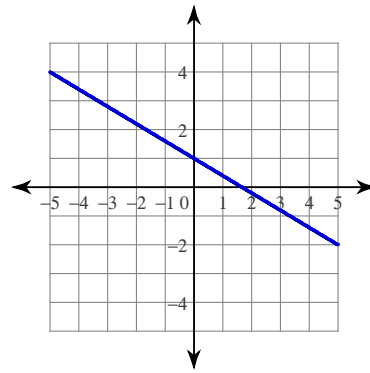
Writing Equations of Lines Given the Graph

Write the slope-intercept form of the equation of each line.

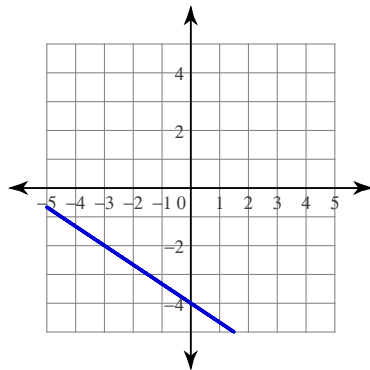
1)



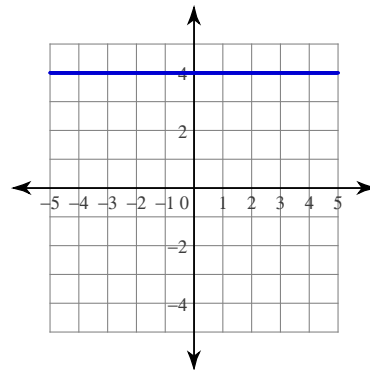
2)



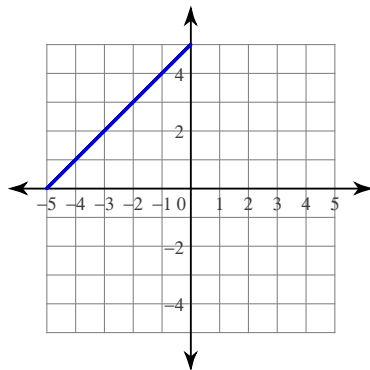
3)



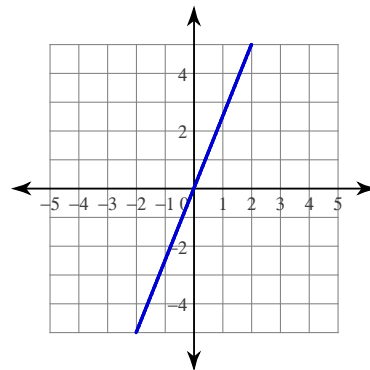
4)



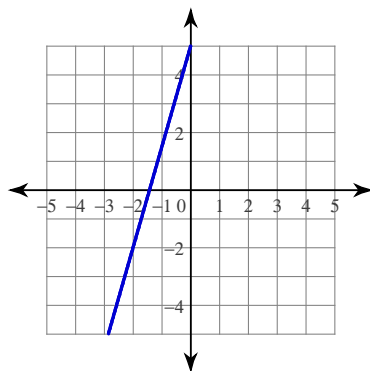
5)



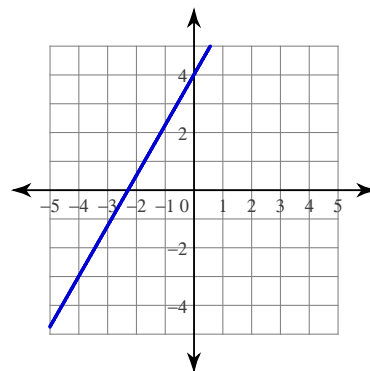
6)



7)



8)



Answers to Writing Equations of Lines Given the Graph

1) $y = 3x$

2) $y = -\frac{3}{5}x + 1$

3) $y = -\frac{2}{3}x - 4$

4) $y = 4$

5) $y = x + 5$

6) $y = \frac{5}{2}x$

7) $y = \frac{7}{2}x + 5$

8) $y = \frac{7}{4}x + 4$